



परमाणु ऊर्जा शिक्षण संस्था
Atomic Energy Education Society
कार्यपत्रक / Worksheet (2025-26)

कक्षा /Class: III

विषय / Subject: TWAU

माह/Month: April to August

अंक/ Marks: 80

दिया गया पाठ्य क्रम/ Portion covered: Lesson:1 to 6

विद्यार्थी का नाम /Name of student: _____

अनुक्रमांक/ Roll No. _____ कक्षा/ अनुभाग Class /Sec.: _____ दिनांक / Date: _____

OBSERVATION AND REPORTING - 30 Marks

I.Choose the correct answer and fill in the blanks.

1 x 5 = 5

1. The leaf of a _____ tree is heart in shape.

(mango , peepal , khejadi)

2. Kumbh Mela is held once every _____ years in Hardwar , Prayagraj , Nashik and Ujjain.

(10 , 12 , 15)

3. The topmost layer of the Earth's surface is _____ .

(soil , sand , mud)

4. _____ is the tallest grass.

(Sugarcane , Wheat , Bamboo)

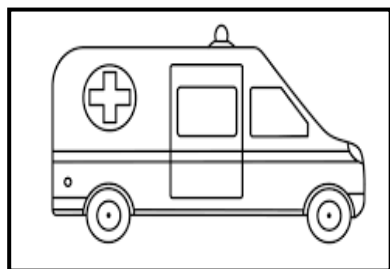
5. Sharul is a _____ festival celebrated in the state of Jharkhand.

(spring , monsoon , winter)

II. Observe the pictures and answer the following questions.

(2 x 5 = 10)

a)



(i)Name the vehicle. _____

(ii)What is the purpose of this vehicle?

b)



(i) Name the bird. _____

(ii) How does the bird build its nest?


c)



(i) Name the game. _____

(ii) How is it played?


d)



(i) When do you make rangolis ?

(ii) What things do we use to make these rangolis?

e)



(i) What type of plant is sugarcane?

(ii) From which part of the plant do we get sugar?

III. Match the following:

(1 x 5 = 5)

lotus leaf

large grass

paddy

Eid-ul-Fitr

pigeon

round

seviyan

uninvited guest

lizard

gutru gu

IV. What do you call them?

(1 x 5 = 5)

Relationship with you	What do you call them?
mother's brother	
father's father	
father's brother	
mother's sister	
father's sister	

V.Circle the odd one.

(1 x 5 = 5)

a) ludo chess cricket snake and ladder

b) cow dog goat tiger

c) river bank post office hospital

d) bus autorickshaw bicycle boat

e) hibiscus rose money plant tulsi

IDENTIFICATION AND CLASSIFICATION – 25 Marks

I.Name any two for each of the following.

(1 x 5 = 5)

a) rides you enjoy in a mela.

_____ , _____

b) games you play outside your home.

_____ , _____

c) animals that eat leaves of plants.

_____ , _____

d) creatures that appear when it rains and the soil is wet.

_____ , _____

e) animals that use the branches of trees to rest and for shelters.

_____ , _____

II.Fill in the blanks with the words given in the help box. (1 x 5 = 5)

Vishu Kani , Yamuna , Sadya , Rafflesia , Mount Everest

a) The traditional grand vegetarian meal served on a banana leaf during Onam festival in Kerala is _____.

b)Kumbh Mela is held on the bank of river _____ in Prayagraj.

c)The highest mountain peak in the world is _____.

d)The auspicious ritual observed on the first day of Malayalam New Year is _____.

e)_____ is the biggest flower in the world.

III.Answer the following questions.

1.Match the names of the food with the festival from the list given below. (1 x 5 = 5)

Holi , Bihu , Chaat Puja , Christmas , Ugadi

Food prepared during festivals	Name of the festivals
Plum Cake	
Thekua	
Gujiya	
Pitha	
Holige	

2.Who am I? (1 x 3 = 3)

a)I am a holi plant.

I have many medicinal values. _____

b)I have a big trunk of wood and many branches that spread out with leaves on them.

c)I come from the dark clouds in the sky.

You have hot pakodas and tea during me. _____

3.Name the following. (1 x 4 = 4)

a) a kind of leafy vegetable eaten with hot rice in Kashmir. _____

b)the country where Mount Everest lies. _____

c)red flower that bloom in Kashmir during spring season. _____

d) the yellow flowers used in the Vishu festival. _____

4. Write one difference between creepers and climbers.

Give two examples for each of the following.

(1 + 2 = 3)

Creepers	Climbers
Examples 1. _____ 2. _____	Examples 1. _____ 2. _____

DISCOVERY OF FACTS – 25 Marks

1. State True or False.

1 x 5 = 5

a) A spider has 6 legs.

b) We can live without plants.

c) Soil is the home of many insects and creatures.

d) The roots of the plant goes deep down into the soil.

e) We should not follow the signboards on the road.

2. Answer the following.

5 x 2 = 10

a) How do festivals and celebrations bring us together?

b) How do you care for your elders?

c) What is soil made of?

d) How do plants help us?

e) Write any two happy moments you enjoy together with your family.

3. Classify the different plants into different groups.

1 x 5 = 5

chinar, moong , pumpkin , paddy , mango , bottle gourd , bamboo , rose , watermelon , money plant

stree	shrub	creeper	climber	grass

4. Draw any three signboards seen on the road and write their meanings. 1 X 3 =3

Signboard	Meaning

5.Name and draw two different vehicles that should be kept in a mela for safety purpose.

1 X 2 =2

--	--